

Year 2 Home learning Wednesday 1st July 2020


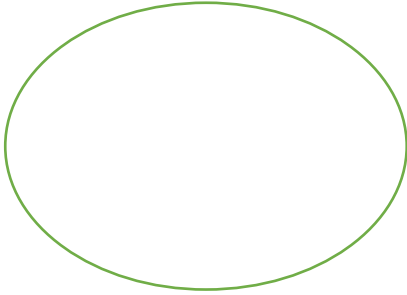
Here are some more multiplication and division real life word problems. Read them carefully and decide if you will have to \times or \div . Write the number sentences and draw pictures to help you figure out the answers.





Doubling means $2\times$ or 2 groups of

Solve these problems by doing jottings



$$2\times 5=$$



$$2\times 10=$$



$$2\times 7=$$



Do your own jottings to solve these problems.

$$2\times 6=$$

$$2\times 9=$$



$$2\times 8=$$

$$2\times 11=$$



Halving means to $\div 2$ or to share into 2 groups.

Solve these problems by doing jottings

$$10 \div 2 =$$



$$12 \div 2 =$$



Do your own jottings to solve these problems.

$$8 \div 2 =$$

$$4 \div 2 =$$

$$14 \div 2 =$$

$$20 \div 2 =$$



Here are a mixture of \times and \div

- 1, The lollipop man helped 3 groups of 6 children cross the road. How many crossed altogether?
2. The doctor saw 1 patient every 10 minutes. How many patients did she see in 40 minutes?
- 3, The teacher shared 50 pencils between 5 children . How many did they get each?
- 4, Dad bought 4 bags of 8 doughnuts from the shops. How many did he buy altogether?
5. Mum share 36 grapes between 3 lunchboxes. How many grapes went in each box?



- These division problems have remainders. Remember you write your answer like this

$$13 \div 4 = 3 \text{ r}1$$

1, Peter Pan had shared 31 apples fairly into 5 baskets. How many apples were in each basket and how many were left over?

2, Tinkerbelle shared 68 flowers fairly into 6 vases. How many flowers were in each vase and how many were left over?

3, Mr and Mrs Beaver share 20 fish between Susan, Lucy and Peter. How many did they get each and how many were left over?

4, Alice shared out 17 cakes between herself and the Mad Hatter. How many did they get each and how many were left over?

5, Biff, chip, Kipper, Mum and Dad shared out 56 strawberries. How many did they get each and how many were left over?