

## Year 2 Maths home learning Thursday 11<sup>th</sup> June 2020





Carry on doing your minute challenge. Are you improving?

Today we will look at the passing of time. Throughout the day keep looking at a real clock and discuss the amount of time that is passing. E.g It's 12 o'clock and we are having lunch. 1 hour ago it was 11 o'clock and we were playing lego. In 1 hours time it will be 1 o'clock and we shall take a walk to the shops.

Please discuss how there are 24 hours in a day and each o'clock time happens twice.







o' clock and the passing of time.

	<p>What time is on the clock? What time will it be 1 hour after this? What time was it 1 hour before this? What are you doing at this time in the morning? What are you doing at this time in the evening?</p>
	<p>What time is on the clock? What time will it be 1 hour after this? What time was it 1 hour before this? What are you doing at this time in the morning? What are you doing at this time in the afternoon?</p>
	<p>What time is on the clock? What time will it be 1 hour after this? What time was it 1 hour before this? What are the special words for these times in the day?</p>
	<p>What time is on the clock? What time will it be 1 hour after this? What time was it 1 hour before this? What are you doing at this time in the morning? What are you doing at this time in the evening?</p>







half past and o'clock- passing of  $\frac{1}{2}$  an hour and 2 hours

	<p>What time is on the clock?</p> <p>What time will it be <math>\frac{1}{2}</math> an hour after this?</p> <p>What time was it <math>\frac{1}{2}</math> an hour before this?</p> <p>What are you doing at this time in the morning?</p> <p>What are you doing at this time in the evening?</p>
	<p>What time is on the clock?</p> <p>What time will it be <math>\frac{1}{2}</math> hour after this?</p> <p>What time was it <math>\frac{1}{2}</math> an hour before this?</p> <p>What are you doing at this time in the morning?</p> <p>What are you doing at this time in the afternoon?</p>
	<p>What time is on the clock?</p> <p>What time will it be 2 hours after this?</p> <p>What time was it 2 hours before this?</p> <p>What are the special words for these times in the day?</p>
	<p>What time is on the clock?</p> <p>What time will it be 2 hours after this?</p> <p>What time was it 2 hours before this?</p> <p>What are you doing at this time in the morning?</p> <p>What are you doing at this time in the evening?</p>



## Passing of different times

	<p>What time is on the clock?</p> <p>What time will it be <math>2\frac{1}{2}</math> hours after this?</p> <p>What time was it <math>\frac{1}{2}</math> an hour before this?</p> <p>What are you doing at this time in the morning?</p> <p>What are you doing at this time in the afternoon?</p>
	<p>What time is on the clock?</p> <p>What time will it be <math>1\frac{1}{2}</math> hour after this?</p> <p>What time was it <math>\frac{1}{4}</math> an hour before this?</p> <p>What are you doing at this time in the morning?</p> <p>What are you doing at this time in the evening?</p>
	<p>What time is on the clock?</p> <p>What time will it be 12 hours after this?</p> <p>What time was it 2 hours before this?</p> <p>What are you doing at this time in the morning?</p> <p>What are you doing at this time in the afternoon?</p>
	<p>What time is on the clock?</p> <p>What time will it be 24 hours after this?</p> <p>What time was it 2 hours before this?</p> <p>What are you doing at this time in the morning?</p> <p>What are you doing at this time in the evening?</p>